

Please check the examination details below before entering your candidate information

Candidate surname		Other names	
Centre Number		Candidate Number	
<input type="text"/>	<input type="text"/>	<input type="text"/>	<input type="text"/>

**Pearson Edexcel Level 1/Level 2 GCSE (9–1)**

**Friday 19 May 2023**


Morning (Time: 1 hour 30 minutes)

Paper reference **1MA1/1F**

**Mathematics**

**PAPER 1 (Non-Calculator)**

**Foundation Tier**



**You must have:** Ruler graduated in centimetres and millimetres, protractor, pair of compasses, pen, HB pencil, eraser, Formulae Sheet (enclosed). Tracing paper may be used.

Total Marks

## Instructions

- Use **black** ink or ball-point pen.
- **Fill in the boxes** at the top of this page with your name, centre number and candidate number.
- Answer **all** questions.
- Answer the questions in the spaces provided  
– *there may be more space than you need.*
- You must **show all your working**.
- Diagrams are **NOT** accurately drawn, unless otherwise indicated.
- **Calculators may not be used.**

## Information

- The total mark for this paper is 80
- The marks for **each** question are shown in brackets  
– *use this as a guide as to how much time to spend on each question.*

## Advice

- Read each question carefully before you start to answer it.
- Try to answer every question.
- Check your answers if you have time at the end.

Turn over ►

P75147A

©2023 Pearson Education Ltd.  
N:1/1/1/1/1/



  
Pearson

Answer ALL questions.

Write your answers in the spaces provided.

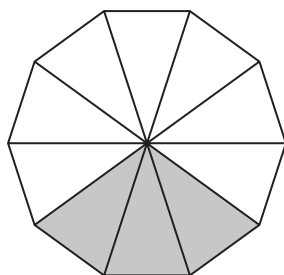
You must write down all the stages in your working.

- 1 Write 38% as a decimal.

0.38

(Total for Question 1 is 1 mark)

- 2 What fraction of this shape is shaded?



$\frac{3}{8}$

(Total for Question 2 is 1 mark)

- 3 Here is a list of numbers.

1.6      1.4      2.1      0.5      1.3

From the list, write down the smallest number.

0.5

(Total for Question 3 is 1 mark)

- 4 Work out  $-9 + 5$

-4

(Total for Question 4 is 1 mark)

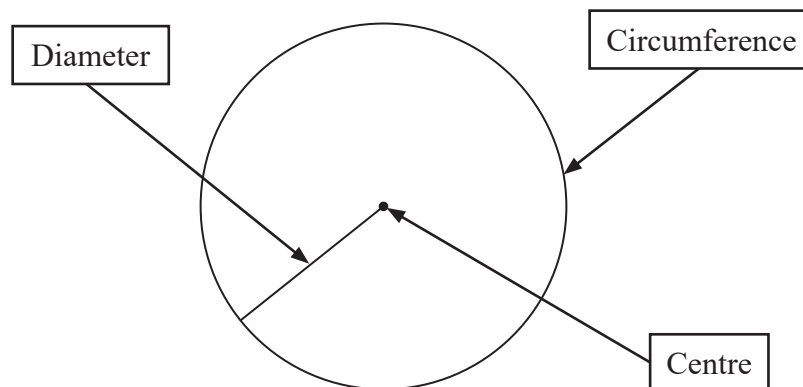


5 Solve  $p - 2 = 3$

$p = 5$

(Total for Question 5 is 1 mark)

6 Freddie adds labels to this diagram of a circle.



Explain why one of the labels is wrong.

the label diameter points to the radius

(Total for Question 6 is 1 mark)



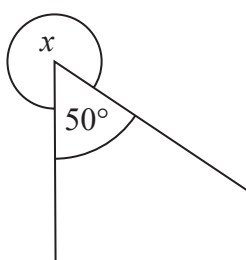
7 Write down **three** different factors of 20

$$\begin{array}{l} 1 \times 20 \\ 2 \times 10 \\ 4 \times 5 \end{array}$$

1, 2, 4

(Total for Question 7 is 2 marks)

8



(a) Work out the size of the angle marked  $x$ .

$$360 - 50 = 310$$

310°  
(2)

A student says that an angle of  $50^\circ$  is an obtuse angle.

The student is wrong.

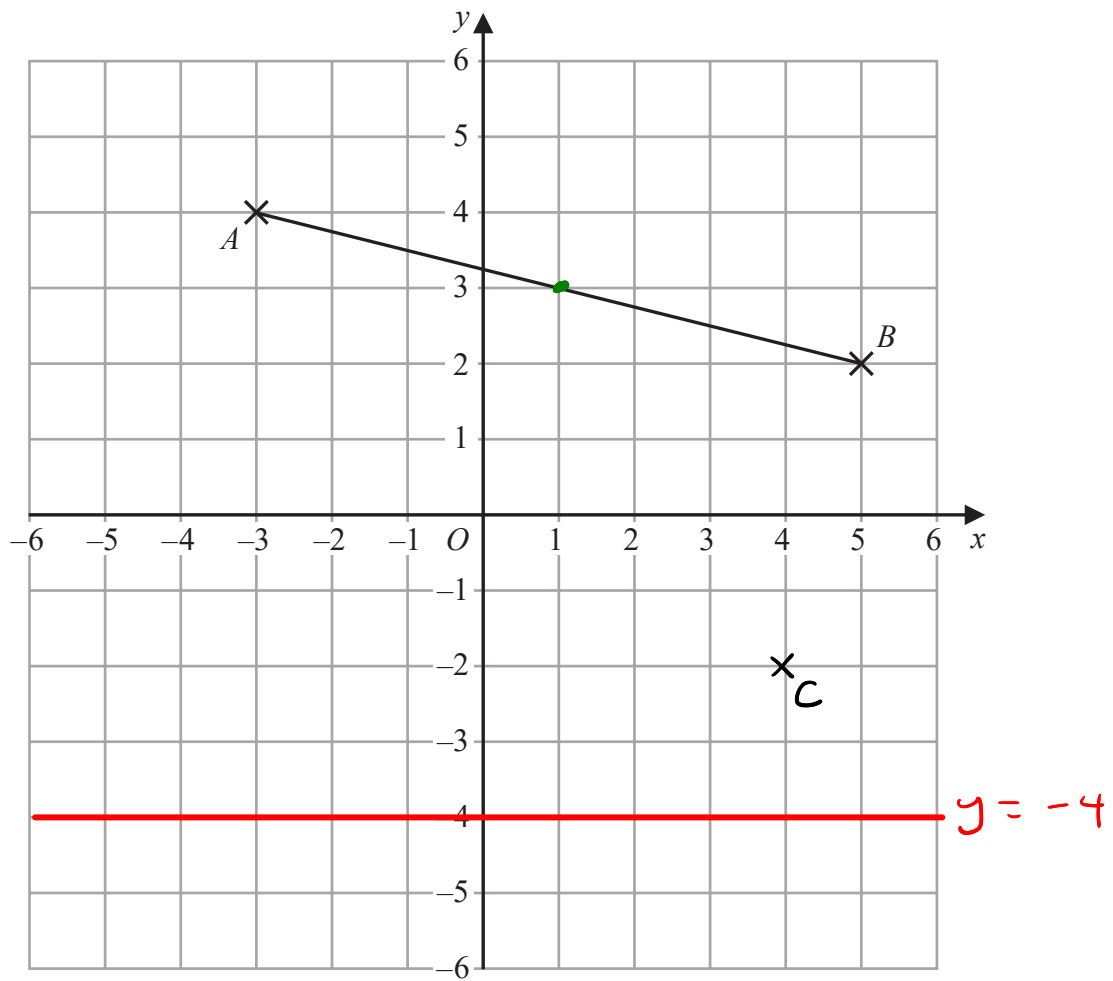
(b) Explain why.

it is less than  $90^\circ$   $\therefore$  it is acute

(1)

(Total for Question 8 is 3 marks)





- (a) Write down the coordinates of point  $B$ .

( 5 , 2 )  
(1)

- (b) Plot the point with coordinates  $(4, -2)$   
Label this point  $C$ .

(1)

- (c) Write down the coordinates of the midpoint of  $AB$ .

( 1 , 3 )  
(1)

- (d) Draw the line with equation  $y = -4$

(1)

(Total for Question 9 is 4 marks)



10 Max sees this special offer in a shop.

Buy one large plate and get one small plate for half the normal price.

The normal price of a large plate is £2

The normal price of a small plate is 80p  $\frac{1}{2}$  price 40p

Max wants to buy 6 large plates and 6 small plates using this offer.

He has £15

Has Max got enough money?

You must show how you get your answer.

$$£2 + 40p = £2.40 \quad (\text{one large} + \text{one small})$$

$$6 \times 2.40$$

$$\begin{array}{r} 240 \\ \times 6 \\ \hline 1440 \\ \hline \end{array} = \underline{\underline{£14.40}}$$

Yes

(Total for Question 10 is 4 marks)



11 A total of 700 tickets were on sale for a football match.

452 of the tickets were sold.

(a) How many tickets were **not** sold?

$$\begin{array}{r} 700 \\ - 452 \\ \hline 248 \end{array}$$

248

(2)

For a different football match,

297 tickets were sold for £9.50 each.

399 tickets were sold for £19.50 each.

(b) Work out an estimate for the total amount of money paid for these tickets.  
You must show all your working.

$$\begin{array}{l} 300 \times 10 = 3000 \\ 400 \times 20 = 8000 \end{array}$$

$$3000 + 8000 = 11000$$

£ 11000

(3)

(c) Is your answer to part (b) an underestimate or an overestimate?  
Give a reason for your answer.

overestimate - all numbers were rounded  
up.

(1)

(Total for Question 11 is 6 marks)



12 Here are 6 numbers.

13      5      4      9      3      8

Work out the mean.

$$\frac{13 + 5 + 4 + 9 + 3 + 8}{6} = \frac{42}{6} = 7$$

7

(Total for Question 12 is 2 marks)

13 (a) Simplify  $\frac{15a}{3}$

5a

(1)

(b) Simplify  $19 + 5b + 4c - 7b + c$

19 - 2b + 5c

(2)

(c) Factorise  $8d - 6$

2(4d - 3)

(1)

(Total for Question 13 is 4 marks)





14 Last week, 73% of the tickets sold at a cinema were adult tickets.

(a) What percentage of the tickets sold were **not** adult tickets?

$$100 - 73 = 27$$

$$\frac{27}{(1)} \%$$

Some people watched a film at the cinema.

number of adults : number of children = 2 : 5

(b) What fraction of these people were adults?

$$2 + 5 = 7 \text{ (7 parts)}$$

$$\frac{2}{7} \text{ (1)}$$

On Friday,

500 people watched a film at the cinema.

70% of these people were children.

$$0.7 \times 500 = \underline{350}$$

On Saturday,

720 people watched the film at the cinema.

$\frac{5}{8}$  of these people were children.

$$\frac{720}{8} = 90 \quad 5 \times 90 = \underline{450}$$

Kasim thinks more children watched the film on Friday than on Saturday.

(c) Is Kasim correct?

You must show how you get your answer.

No.

(3)

(Total for Question 14 is 5 marks)



15 Work out  $\frac{1}{6} \times \frac{5}{12}$

Give your answer as a fraction in its simplest form.

$$\frac{5}{14}$$

(Total for Question 15 is 2 marks)

16 Here is the list of ingredients for making 20 biscuits.

$$20 \times \underline{3} = 60$$

Ingredients for 20 biscuits

150 g butter  
100 g sugar  
250 g flour

Harry wants to make 60 biscuits.

How much flour does Harry need?

$$250 \times \underline{3} = 750 \text{ g}$$

$$750 \text{ g}$$

(Total for Question 16 is 2 marks)



17 There are 200 counters in a bag.

38 counters are red.

52 counters are blue.

The rest of the counters are yellow or green.

There are the same number of yellow counters as green counters.

What percentage of the counters in the bag are yellow?

$$38 + 52 = 90$$

$$200 - 90 = 110$$

$$\frac{110}{2} = 55 \text{ (yellow counters)}$$

$$\frac{55}{200} = \frac{27.5}{100} = 27.5\%$$

27.5 %

(Total for Question 17 is 4 marks)

18 Naomi has  $b$  bags of apples and  $c$  crates of apples.

There are 5 apples in each bag.

There are 28 apples in each crate.

Naomi has a total of  $T$  apples.

Write a formula for  $T$  in terms of  $b$  and  $c$ .

$$T = 5b + 28c$$

$$T = 5b + 28c$$

(Total for Question 18 is 3 marks)



19 Here are the first five terms of an arithmetic sequence.

$$\begin{array}{ccccccc} & +8 & & +8 & & +8 & & +8 \\ -5 & & 3 & & 11 & & 19 & & 27 \end{array}$$

Find an expression, in terms of  $n$ , for the  $n$ th term of this sequence.

$$8n \quad 8 \quad 16 \quad 24 \quad 32 \quad 40$$

$$8n - 13$$

(Total for Question 19 is 2 marks)

20 Work out  $8.46 \div 0.15$

$$846 \div 15$$

$$\begin{array}{r} 056.4 \\ 15 \overline{) 8496.0} \end{array}$$

$$\begin{array}{l} 15 \\ 30 \\ 45 \\ 60 \\ 75 \\ 90 \\ 105 \\ 120 \\ 135 \\ 150 \end{array}$$

$$56.4$$

(Total for Question 20 is 3 marks)



21 Work out  $7\frac{3}{8} - 2\frac{1}{2}$

Give your answer as a mixed number.

$$7 \times 8 = 56$$

$$2 \times 2 = 4$$

$$\frac{56}{8} + \frac{3}{8} = \frac{59}{8}$$

$$\frac{4}{2} + \frac{1}{2} = \frac{5}{2}$$

$$\frac{59}{8} - \frac{5}{2} \begin{matrix} \times 4 \\ \times 4 \end{matrix}$$

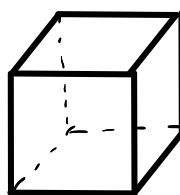
$$\frac{59}{8} - \frac{20}{8} = \frac{39}{8} = 4\frac{7}{8}$$

$$4\frac{7}{8}$$

(Total for Question 21 is 3 marks)

22 A cube has a total surface area of  $150\text{ cm}^2$

Work out the volume of the cube.



6 faces

$$\frac{150}{6} = 25\text{ cm}^2$$

Area of each square =  $25\text{ cm}^2$

$$\sqrt{25} = 5\text{ cm} \rightarrow \text{length of each side}$$

$$\begin{aligned} \text{Volume} &= 5 \times 5 \times 5 \\ &= \underline{\underline{125\text{ cm}^3}} \end{aligned}$$

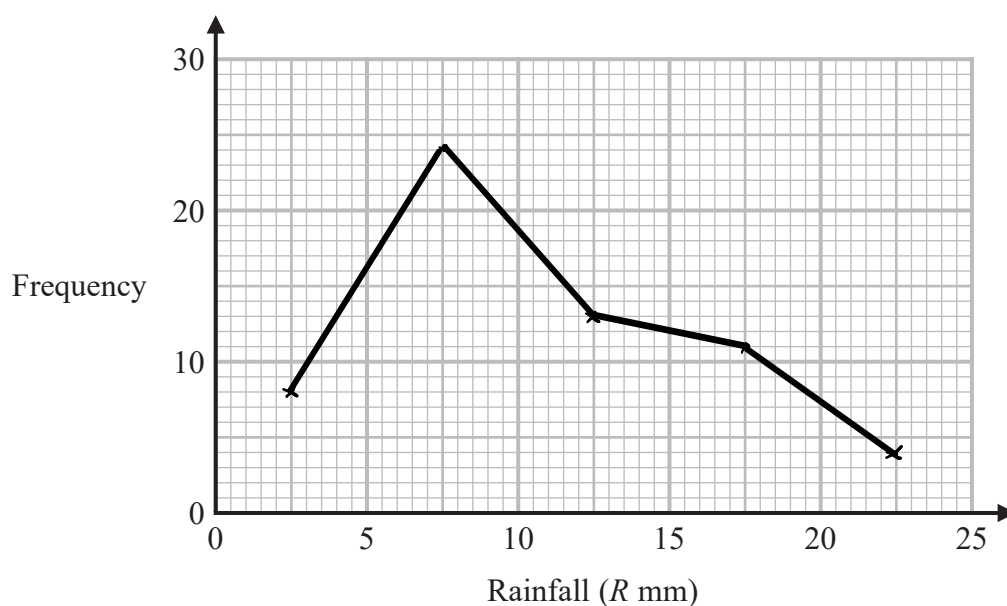
$$125\text{ cm}^3$$

(Total for Question 22 is 4 marks)

23 The table shows information about the daily rainfall in a town for 60 days.

Rainfall ( $R$ mm)	Frequency
$0 \leq R < 5$	8
$5 \leq R < 10$	24
$10 \leq R < 15$	13
$15 \leq R < 20$	11
$20 \leq R < 25$	4

Draw a frequency polygon for this information.



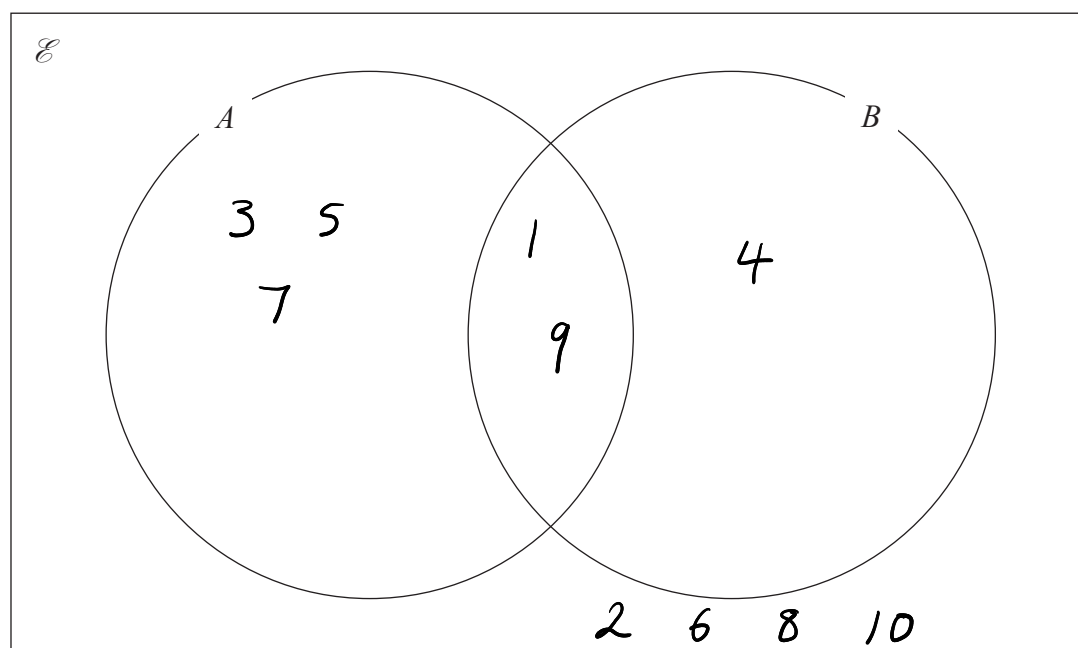
(Total for Question 23 is 2 marks)

24  $\mathcal{E} = \{1, 2, 3, 4, 5, 6, 7, 8, 9, 10\}$

$A = \{\text{odd numbers}\}$

$B = \{\text{square numbers}\}$

(a) Complete the Venn diagram for this information.



(3)

A number is chosen at random from the universal set  $\mathcal{E}$

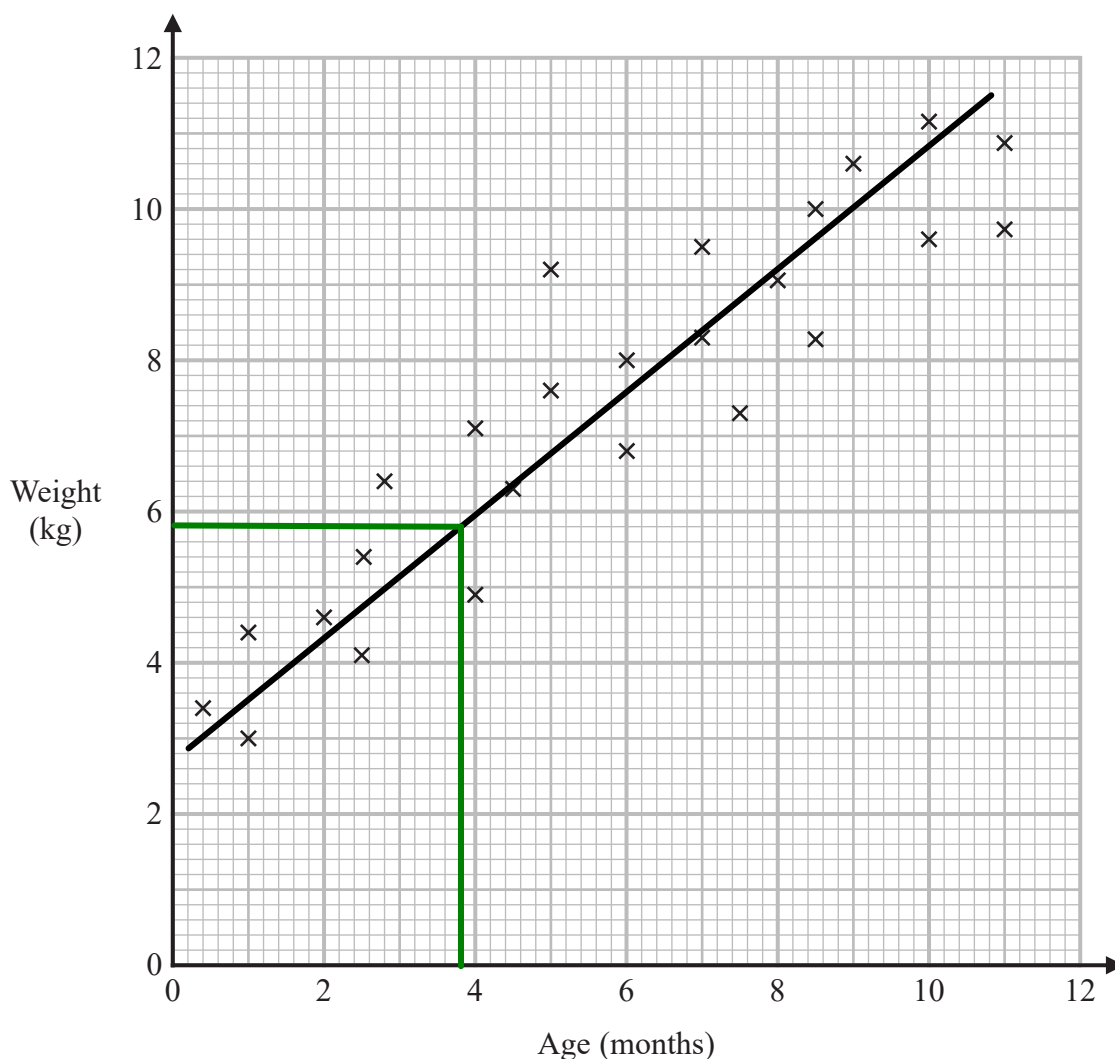
(b) Find the probability that this number is in the set  $B'$   
not in B

$$\frac{7}{10}$$

(2)

(Total for Question 24 is 5 marks)

25 The scatter graph shows information about the ages and weights of some babies.



(a) Describe the relationship between the age and the weight of the babies.

as age increases weight increases (positive correlation)

(1)

Another baby has a weight of 5.8 kg

(b) Using the scatter graph, find an estimate for the age of this baby.

3.8

months

(2.5 to 4.5)<sup>(2)</sup>

(Total for Question 25 is 3 marks)





- 26 The price of a holiday increases by 20%  
This 20% increase adds £240 to the price of the holiday.

Work out the price of the holiday before the increase.

$$\begin{array}{r} 20\% = 240 \\ \times 5 \qquad \times 5 \end{array}$$

$$100\% = \underline{\underline{1200}}$$

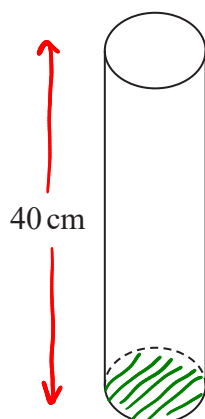
=

£ 1200

(Total for Question 26 is 2 marks)



27 The diagram shows a solid cylinder on a horizontal floor.



$$\text{pressure} = \frac{\text{force}}{\text{area}}$$

DO NOT WRITE IN THIS AREA

DO NOT WRITE IN THIS AREA

DO NOT WRITE IN THIS AREA

The cylinder has a

volume of  $1200 \text{ cm}^3$   
height of 40 cm.

$$\text{volume} = \text{area of cross section} \times \text{length}$$

The cylinder exerts a force of 90 newtons on the floor.

Work out the pressure on the floor due to the cylinder.

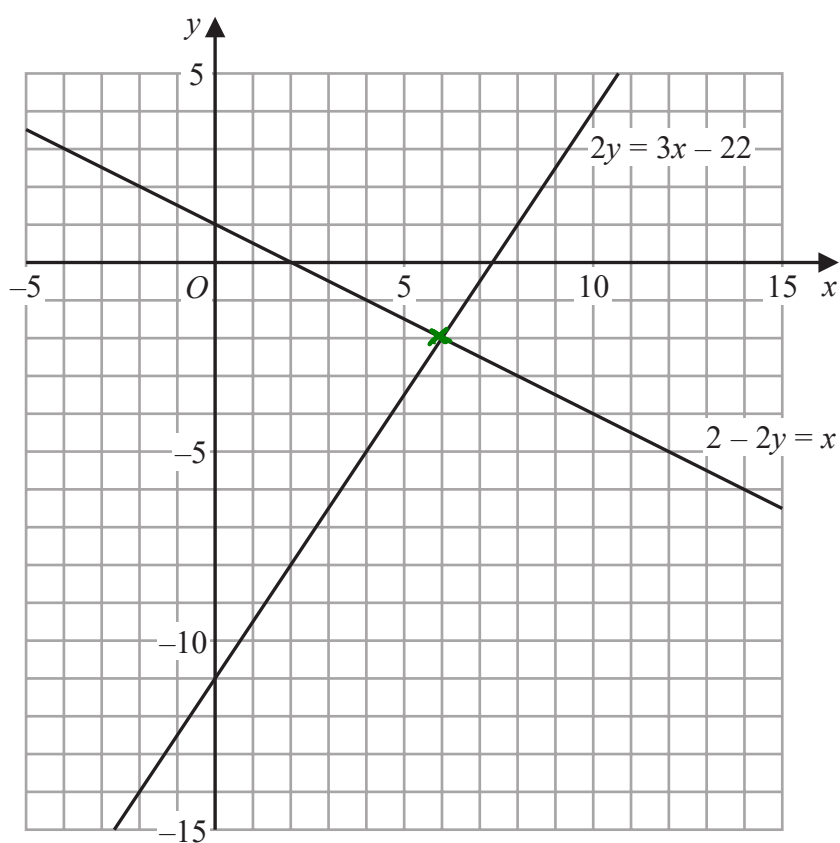
$$\begin{aligned} 1200 &= \text{area} \times 40 \\ \text{area} &= \frac{1200}{40} \\ &= \underline{\underline{30}} \end{aligned}$$

$$\begin{aligned} \text{pressure} &= \frac{90}{30} \\ &= 3 \end{aligned}$$

.....3..... newtons/cm<sup>2</sup>

(Total for Question 27 is 3 marks)





Use these graphs to solve the simultaneous equations

$$\begin{aligned} 2 - 2y &= x \\ 2y &= 3x - 22 \end{aligned}$$

$$\begin{aligned} x &= 6 \\ y &= -2 \end{aligned}$$

(Total for Question 28 is 1 mark)



29 Work out the value of  $\frac{4^{-6} \times 4^9}{4}$

$$4^{-6} \times 4^9 = 4^3$$

$$4^3 \div 4^1 = 4^2 \\ = 16$$

16

(Total for Question 29 is 2 marks)

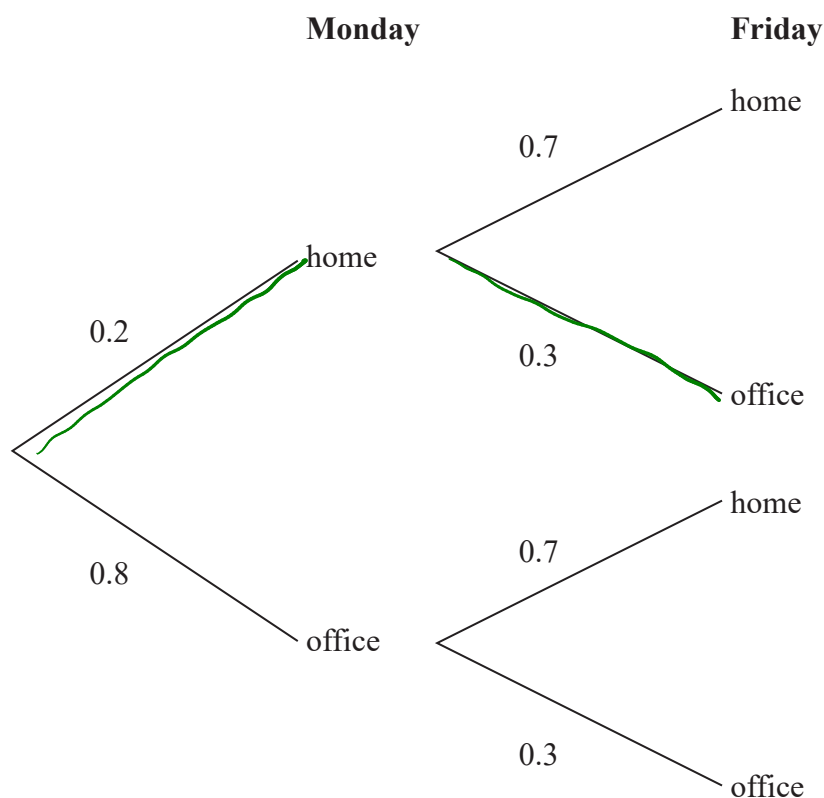
30 Write down the exact value of  $\cos 60^\circ$

$\frac{1}{2}$

(Total for Question 30 is 1 mark)



- 31 The probability tree diagram shows the probabilities that Shayla will work at home or will work at the office on two days next week.



Work out the probability that Shayla will work at home on Monday and work at the office on Friday.

$$0.2 \times 0.3 = 0.06$$

0.06

(Total for Question 31 is 2 marks)

TOTAL FOR PAPER IS 80 MARKS

DO NOT WRITE IN THIS AREA

DO NOT WRITE IN THIS AREA

DO NOT WRITE IN THIS AREA

**BLANK PAGE**



DO NOT WRITE IN THIS AREA

DO NOT WRITE IN THIS AREA

DO NOT WRITE IN THIS AREA

**BLANK PAGE**



DO NOT WRITE IN THIS AREA

DO NOT WRITE IN THIS AREA

DO NOT WRITE IN THIS AREA

**BLANK PAGE**

